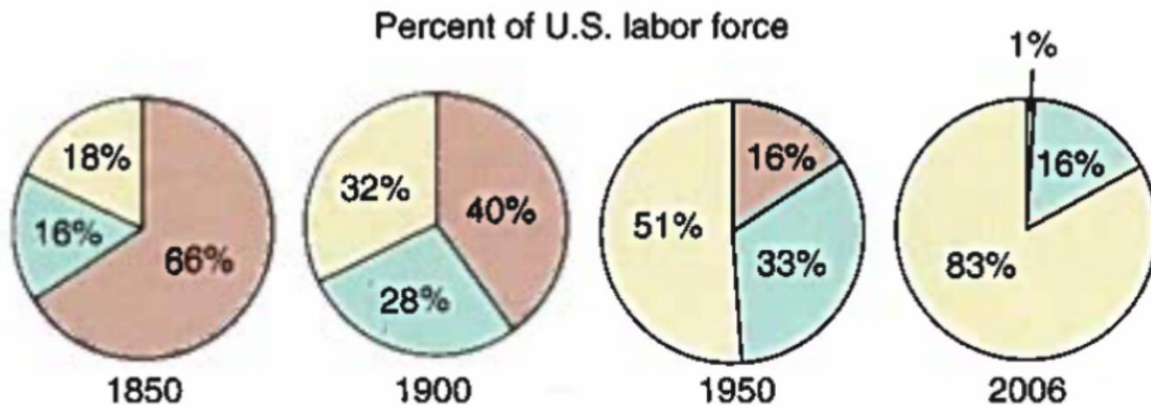


Unit 5 (Agriculture) Study Sheet



Identify which color is primary, secondary, and tertiary sectors in the image above:

Now explain why these percentages changed so much over those years:

The Three Agricultural Revolutions (Summarize each in three words and put some main details next to the bullet points):

1st Agricultural Revolution:

- _____
-
-
-

2nd Agricultural Revolution:

- _____
-
-
-

*How did this agricultural revolution contribute to the start of the Industrial Revolution in England?

3rd Agricultural Revolution:

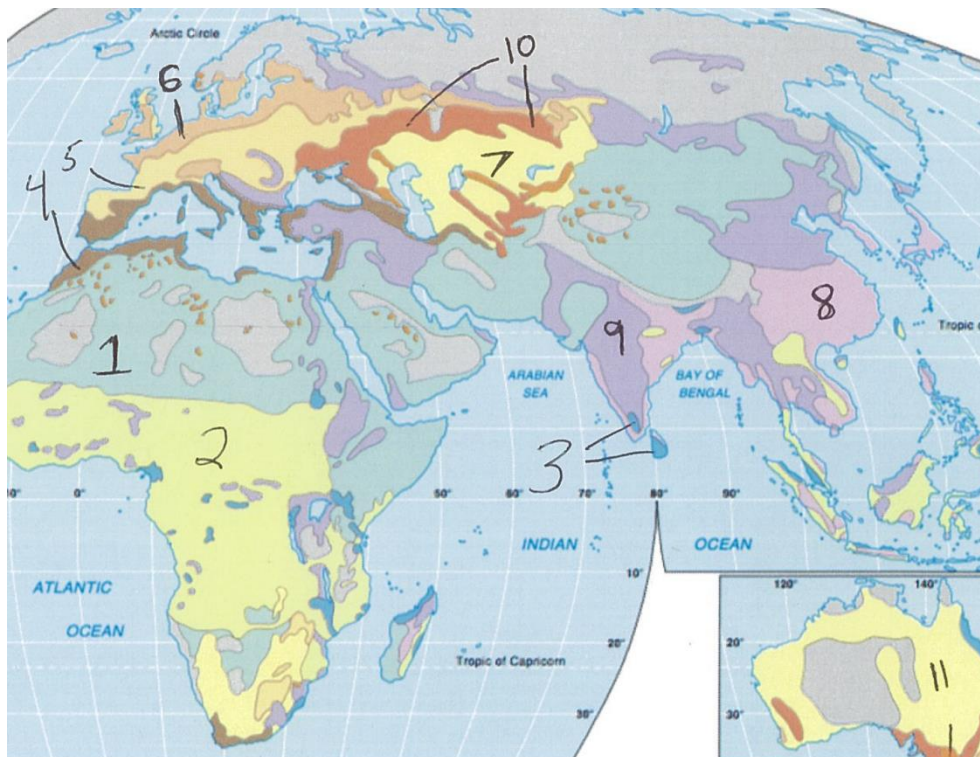
- _____
-
-
-

What were three big impacts of the Colombian Exchange:

- 1.
- 2.
- 3.

Give three reasons the death rate dropped so much during stage 2 of the DTM for the United Kingdom (around 1760):

- 1.
- 2.
- 3.



Put the appropriate number from the map above to identify the type of agriculture practiced:

Shifting cultivation

Intensive subsistence, wet rice dominant

Intensive subsistence, wet rice not dominant

Pastoral nomadism

Mixed crop and livestock

Dairy

Grain

Livestock ranching

Mediterranean

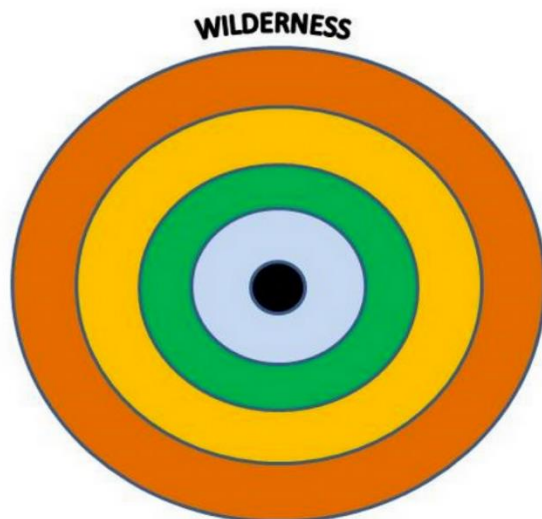
Commercial gardening

Plantation

Why is so much corn grown in the United States? (Give several reasons):

Describe the difference between intensive and extensive agriculture:

In the image below, identify what type of agriculture would be found in each ring of Von Thunen's model:



Give a couple of reasons why Von Thunen's model is not as valid in today's world: